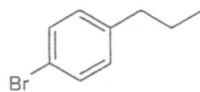

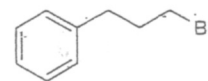



Which mass spectrum corresponds to which compound. State one reason for your decision.



1-Bromo-4-propylbenzene



(3-Bromopropyl)benzene



14.44

Mass spectra of 1-bromo-4-propylbenzene and (3-bromopropyl)benzene.

7. Determine the structure of the following 2 compounds from the IR spectra. One has formula $C_6H_{10}O$ and the other C_7H_6O .

